



Nombre: Fecha: Curso:

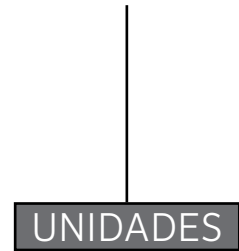
1 Suma y dibuja el resultado en el ábaco.



$5 + 1 = \dots\dots\dots$



$1 + 6 = \dots\dots\dots$




$7 + 1 = \dots\dots\dots$



$1 + 8 = \dots\dots\dots$



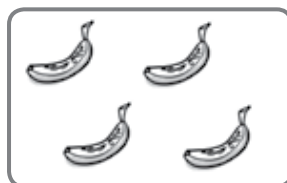
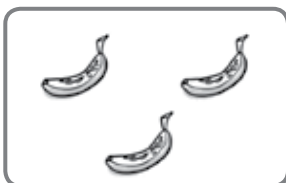
2 Elige la solución correcta y completa.







$4 \text{ } \img alt="apple icon" data-bbox="210 655 255 688" \text{ } + \text{ } 2 \text{ } \img alt="apple icon" data-bbox="390 655 435 688" \text{ } = \text{ } \dots\dots\dots \text{ } \img alt="apple icon" data-bbox="645 655 690 688"/>$







$3 \text{ } \img alt="banana icon" data-bbox="215 864 260 897" \text{ } + \text{ } \dots\dots\dots \text{ } \img alt="banana icon" data-bbox="390 864 435 897" \text{ } = \text{ } \dots\dots\dots \text{ } \img alt="banana icon" data-bbox="645 864 690 897"/>$